
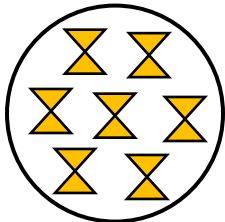
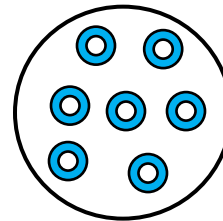


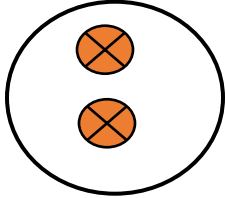


2021 WORKSHEET 3

NUMERACY YEAR 1

Answer all the questions in your Mathematics Activity book.

1. Match the number of objects in the sets using a line.



(3 marks)

2. Count back in 4s from the given number and fill in the given spaces.



(4 marks)

3. Count forward in 5s from the given number and fill in the given spaces.



(3 marks)

4. Write the numbers of the given number names in the given spaces.

Thirty Five

Sixty Nine

(2 marks)

